

Name : _____

Score : _____

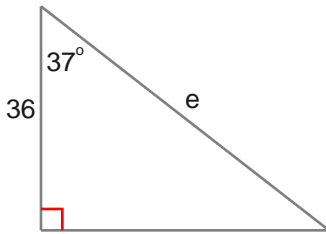
Teacher : _____

Date : _____

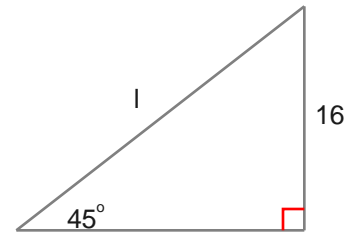
Solving Right Triangles

Find the side indicated by a variable. Round to the nearest tenth.

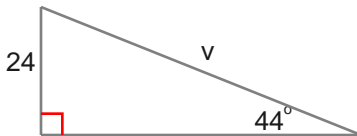
1) $e =$ _____



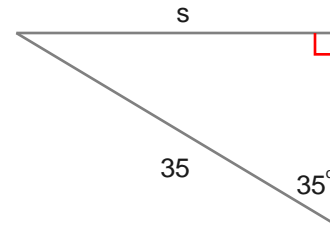
2) $l =$ _____



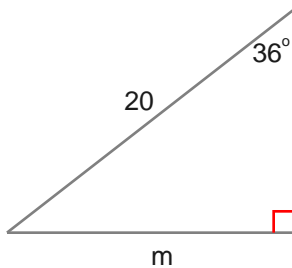
3) $v =$ _____



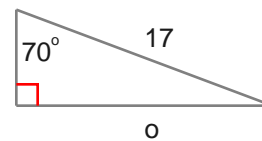
4) $s =$ _____



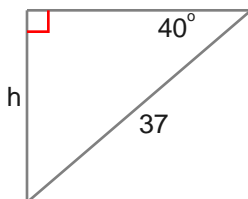
5) $m =$ _____



6) $o =$ _____



7) $h =$ _____



8) $h =$ _____

