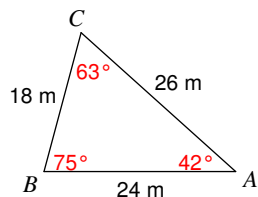


Law of Sines and Cosines Review Worksheet

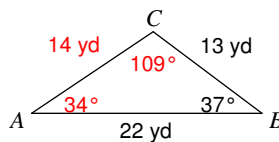
© 2011 Kuta Software LLC. All rights reserved.

Solve each triangle. Round your answers to the nearest tenth.

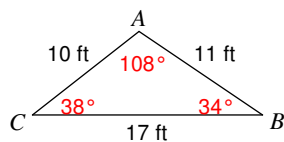
1)



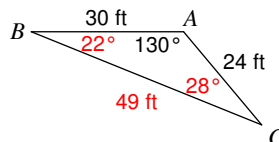
2)



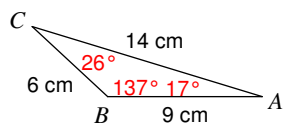
3)



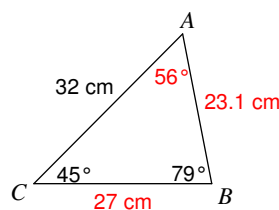
4)



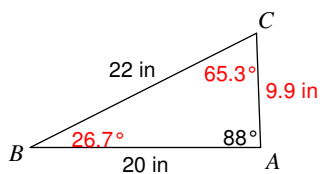
5)



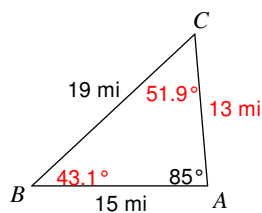
6)



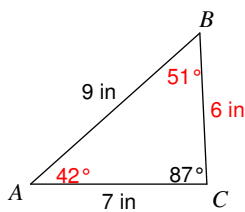
7)



8)



9)



10)

